

LAND FORMATIONS

Find the following land formations in your book, an encyclopedia, an atlas, or online. Draw an outline of the formation in the box to the left and describe the formation in the space to the right.




ISTHMUS



LAKE:



**MOUNTAIN OR
MOUNTAIN RANGE:**



OASIS:



PENINSULA:



PLAIN:



OCEAN:




CANYON:



CAPE:




DELTA:




TRIBUTARY:



MESA:



DESERT:



GULF:



ISLAND



SAND DUNE:



MOUNTAIN PASS:



SOUND:



STRAIT:




STEPPE:



RIVER:




VALLEY




**WATERFALL
(CATARACT):**



ARCHIPELAGO:



BASIN:



CANAL:



CHANNEL:



CLIFF:



COAST:



DAM:



DIVIDE:



FOREST:



FORK:



GLACIER:

HARBOR:

HIGHLAND:

HILL:

ICEBERG:

INLET:

LOWLAND:

MOUTH (OF A RIVER):

PLATEAU:

PORT:



PRAIRIE:



RAPIDS:



REEF:




RESERVOIR:



SEA:



SOURCE:



SOURCE (OF A RIVER):



SWAMP:



VOLCANO: